

Fach:

Technische Kommunikation

Thema:

Übung zum räumlichen Denken

LOS!

Datum:

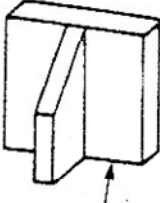
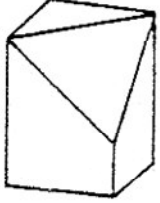


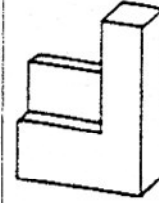
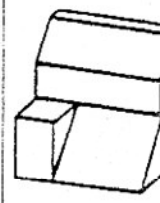
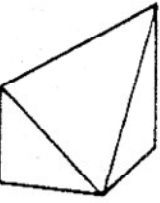
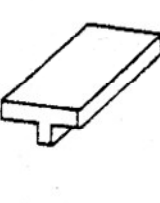
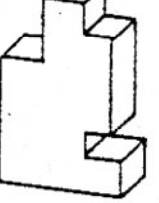
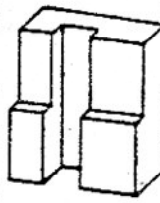
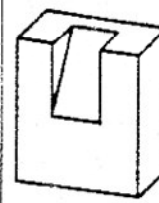
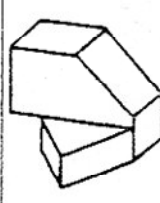

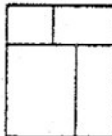
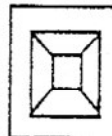
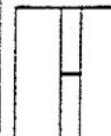
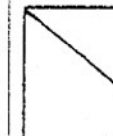




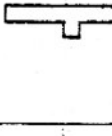
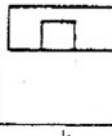
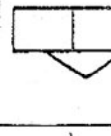
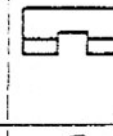
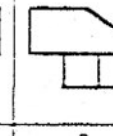
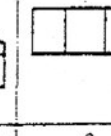
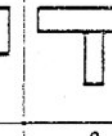
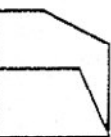


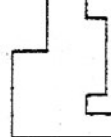

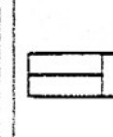


Name:

Klasse:

Blatt-Nr.:

Aufgabe:

Suchen Sie zu den nummerierten Schrägbildern die dazugehörige „**Vorderansicht (VA)**“ und „**Draufsicht (DS)**“ und tragen Sie die entsprechenden Buchstaben in die Tabelle ein!

							
1	2	3	4	5	6		
							
7	8	9	10	11	12		
							
a	b	c	d	e	f	g	h
							
i	j	k	l	m	n	o	p
							
q	r	s	t	u	v	w	x

	a	b	c	d	e	f	g	h	i	j	k	l	m	n	o	p	q	r	s	t	u	v	w	x
1																								
2																								
3																								
4																								
5																								
6																								
7																								
8																								
9																								
10																								
11																								
12																								