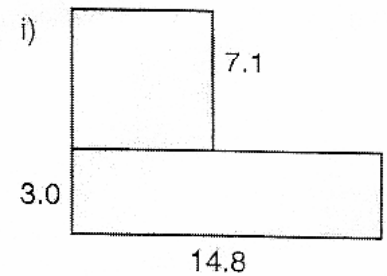
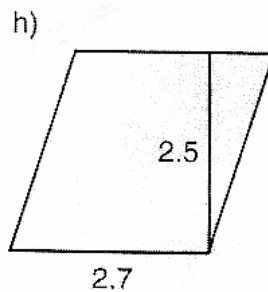
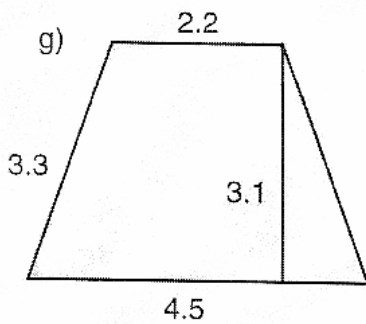
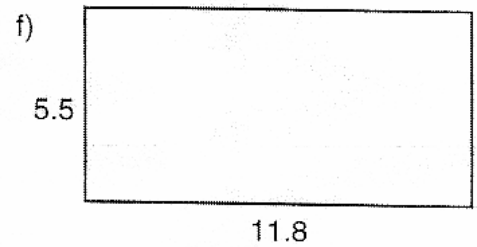
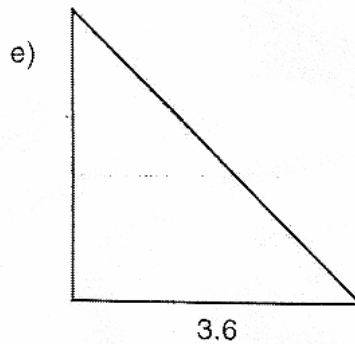
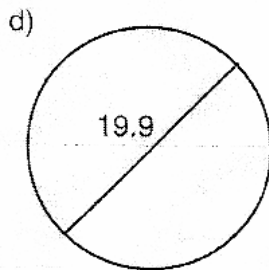
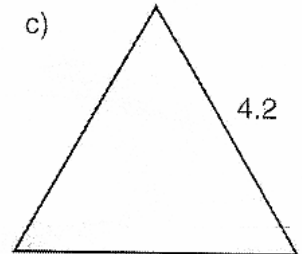
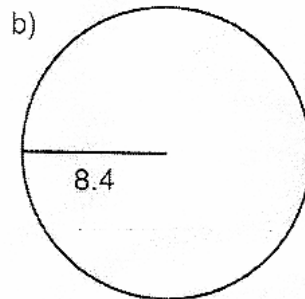
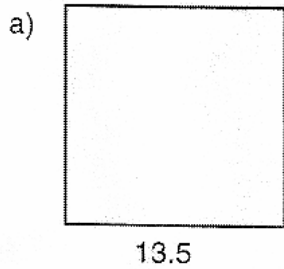


Die Prismen mit den nachstehend gezeichneten Grundflächen sind jeweils **7 m hoch**. Alle Seiten sind in **m** angegeben. Berechne **Volumen und Oberfläche** von jedem Prisma!



Nr.	Volumen (m ³)	Grundfläche (m ²)	Mantelflächen (m ²)	Oberfläche (m ²)
a)				
b)				
c)				
d)				
e)				
f)				
g)				
h)				
i)				