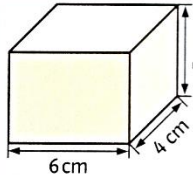
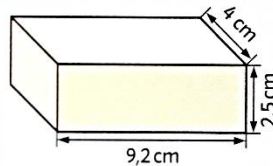


1 Berechnen Sie die Oberfläche und das Volumen der Quader.



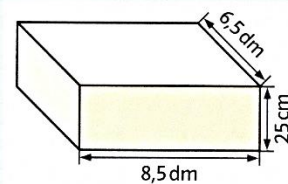
O = _____

V = _____



O = _____

V = _____



O = _____

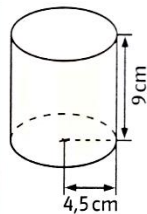
V = _____



2 Berechnen Sie das Volumen der Figuren.

a) Zylinder mit
r = 3,4 cm
h = 15 cm

V = _____

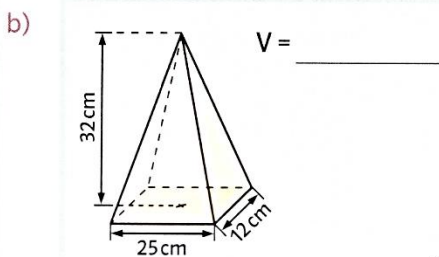


V = _____



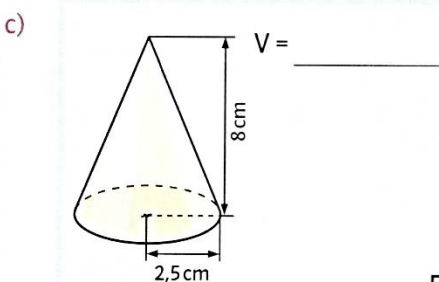
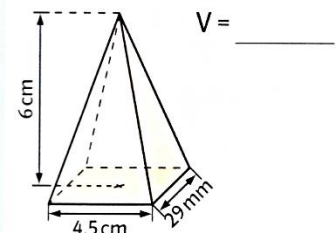
Zylinder mit
d = 9,8 cm
h = 12,2 cm

V = _____



Pyramide mit
a = 4,8 cm
b = 9,5 cm
h = 22,4 cm

V = _____



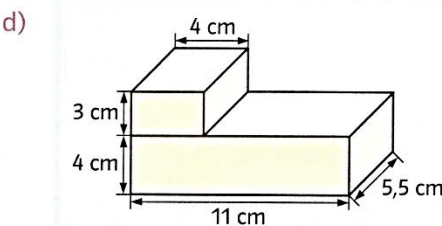
Kegel mit
r = 2,4 cm
h = 4,8 cm

V = _____

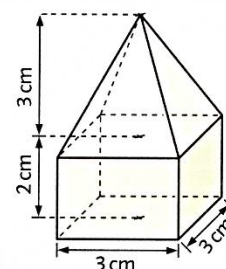


Kegel mit
d = 28 cm
h = 12 cm

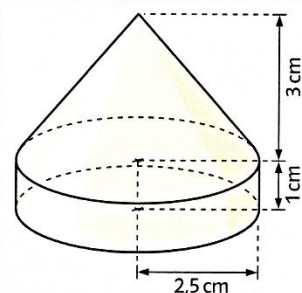
V = _____



V = _____



V = _____



V = _____

